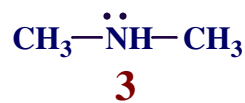
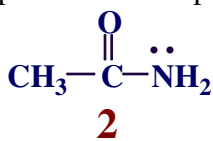
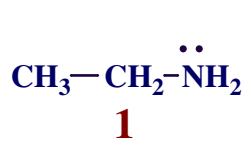
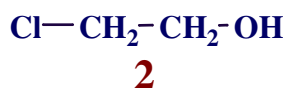
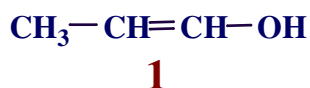


Exercices (Effets électroniques)

1. Classer les bases suivantes de la plus faible à la plus forte.



2. Classer les acides suivants du plus faible au plus fort.



Solutionnaire

1. **2 - 1 - 3**

2. **3 - 2 - 1**